




Activity Corner

Colour the picture of a computer shown below. Write ways in which a computer helps you.



Computer helps me to

Activity Corner

Write five ways in which you take care of your computer.

1 _____

3 _____



2 _____

4 _____

5 _____

Word Search Puzzle

Write the names of the parts of a computer using the given clues. Then find these names in the grid.

1. I am the brain of a computer.

2. I have letters and number keys.

3. I show work done on a computer.

4. I print the work done on a computer.

5. I point objects on a monitor.

6. I read images and store them on a computer.

7. I help to listen to music.

8. I record different sounds.



M	M	O	N	I	T	O	R	E	K
R	O	U	G	O	D	C	W	S	E
B	U	B	K	Z	I	L	F	C	Y
N	S	P	E	A	K	E	R	A	B
P	E	Y	C	X	G	T	E	N	O
X	A	J	C	P	U	H	J	N	A
D	M	F	P	R	I	N	T	E	R
W	Q	V	H	S	R	O	V	R	D
N	T	P	A	I	K	S	U	Q	L
M	I	C	R	O	P	H	O	N	E

Find the names of the places where computers are used in the given word search puzzle. Also write any one of their use in the space provided.





Do and Learn

Unscramble the letters to name the additional devices connected to a computer.

1. ACSENNR

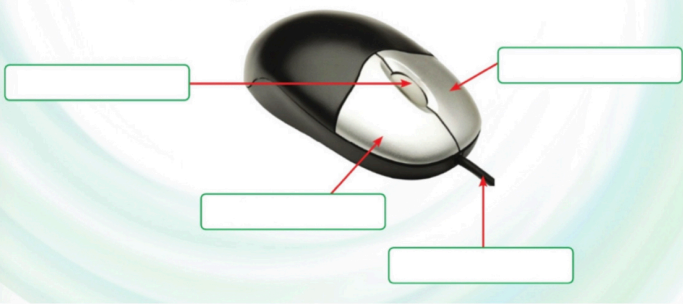
--	--	--	--	--	--	--

2. PESKAERS

--	--	--	--	--	--	--	--

3. RIPTNER

--	--	--	--	--	--	--



Label different keys of the keyboard



Class - 3 English Holidays Homework.

A. Underline the subject in each of these sentences.

1. The snake caught the frog.
2. She is eating an ice-cream.
3. The children are singing rhymes.
4. Basanti is wearing a sari.
5. I bought a jacket

Rewrite the groups of words to make sentences. Use capital letters and full stops correctly:

1. books good read I
2. Sun the dawn at rises
3. night sleep at I early
4. birthday is my today.
5. favourite flower my rose is the

Exercise

Read the following sentences and identify their kind.

1. I have two pet dogs.
2. Have you finished the report?
3. Where have you been all this while?
4. It hasn't stopped raining since yesterday.
5. She leaned out of the window.
6. Listen to me.
7. Don't make a noise.
8. Ouch! I have cut my chin!
9. We must not tolerate injustice.
10. Open the box.

Rearrange these groups of words to form sentences.

1. with sentences letters begin always capital

2. grandmother's keys on are table the

3. a Reeta skirt wearing is pink

4. seven are in colours rainbow there a

5. is bird peacock the national our

Noun - Gender

Masculine	Feminine
King	Queen
Brother	Sister
Prince	Princess
Boy	Girl
Father	Mother

Masculine Feminine

1. Uncle - 2. Brother - 3. Son - 4. Man - 5. Father - 6. King - 7. Hero - 8. Soldier - 9. Doctor - 10. Teacher - 11. Farmer - 12. Engineer - 13. Scientist - 14. Astronaut - 15. Pilot - 16. Captain - 17. General - 18. President - 19. Prime Minister - 20. Pope - 21. Monk - 22. Priest - 23. Bishop - 24. Cardinal - 25. Archbishop - 26. Patriarch - 27. Pope - 28. Emperor - 29. King - 30. Queen - 31. Prince - 32. Princess - 33. Duke - 34. Duchess - 35. Count - 36. Countess - 37. Baron - 38. Baroness - 39. Knight - 40. Lady - 41. Dame - 42. Empress - 43. Empress - 44. Empress - 45. Empress - 46. Empress - 47. Empress - 48. Empress - 49. Empress - 50. Empress

Uncle

Aunt

Son

Daughter

Man

Woman

Sir

Madam

Actor

Actress

Lion

Lioness


Poet

Poetess

Q. Reading Comprehension

Anna's lute

Anna's favorite hobby is playing lute. She spends a lot of her free time playing lute. She started learning to play lute when she was 5 years old. She played in her school's band.



Anna's dad bought her a lute and she started practicing every day after school. It was very loud, but her mother never complained. She improved a lot, and playing lute has been her favorite hobby ever since.

1) What is Anna's favorite hobby?

2) When did Anna start to play lute?

3) Who bought Anna a lute?

4) What is the title of the story?

5) Where did Anna perform lute?

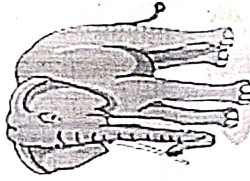
Grade 3 Reading Comprehension Worksheet

Great Big Elephants

By Rosa Müller

Read the passage below.

Almost everything about elephants is big. They are the largest animals that live on land. There are two kinds of elephants: the Indian elephant and the African elephant. A male, African elephant can weigh up to six thousand kilos. Elephants can be up to four meters tall. Elephants need to live in very large areas because they eat and drink so much. Every day, elephants spend about 16 hours eating. They eat up to 200 kilos of food. They can drink over 250 liters of water. Elephants have very big, very thin ears. Elephants use their ears to cool themselves down. An elephant's trunk can smell food, water and predators. Elephants need very strong legs to support their heavy bodies. Elephant tusks are really long, curved teeth. Elephants use their tusks to dig for food and water and to fight.



Answer each question.

1. How many kinds of elephants are there?

2. A male, African elephant can weigh up to six thousand kilos.
a. True b. False
3. Why elephants need to live in large areas?

4. What does elephant's trunk smell?

5. Why elephants need strong legs?

6. What are the tusks?

MODEL SCHOOL KALANAUR
HOLIDAYS HW (2021-22)

Name _____

Roll no. _____

Class -III

EVS

A. Tick the Correct Answer

- 1 A joint family is a _____
i big family ii small family iii neighbourhood
- 2 Children learn the skill sets of the elders in their _____
i school ii home iii neighbourhood
3. The common name of family members is called _____
i surname ii final name iii last name
- 4 Defining features of a body of a person are known as _____
i physical characteristics ii hereditary features iii skills
- 5 Uncles and aunts are _____
i extended family ii non family members iii immediate family
- 6 Many times, people can identify parents of children by looking at the child because the children _____
i behave like them ii look like them iii work like them
- 7 Braille is made up of one to _____ raised dots which are like alphabets.
i) six ii) five iii) ten
- 8 Peepal is a _____
i shrub ii tree iii herb
- 9 The people who cannot see are _____ impaired.
i hearing ii visually iii speech
- 10 Rose is a _____
i shrub ii climber iii creeper
- 11 The people who cannot hear are _____ impaired.
i) visually ii) hearing iii) speech
- 12 _____ is an aquatic plant.
i mint ii watermelon iii water lily

B Fill in the blanks

- 1 A very large family with grandparents, uncles and aunts is called a _____ family.
- 2 _____ are children born at the same time from the same set of parents.
- 3 Resemblance in a family where family members look like each other is because of _____.
- 4 Family members _____ and provide support to each other.
- 5 Children of tall parents are usually _____.
- 6 Parents, their sons and daughters form the _____ family.
- 7 The skills of family members are called _____.
- 8 The members of a family must respect each other's _____.

C Write true or false

- 1 Old people are called senior citizens.
- 2 Basil is a shrub.
- 3 Airplanes offer braille magazines for hearing impaired travelers.
- 4 Coconut trees grow in the desert areas.
- 5 Old people use hearing aids.
- 6 Conifers shed their leaves in winter.
- 7 Hearing impaired people use sign language to say something.
- 8 Plant can make their own food.
- 9 Pumpkin is a creeper.

My Family

Hello! I am Amolika. I am eight years old. This is my brother Ajoy and my good friend Aarzoo. My father is a dentist, and my mother is a teacher. Our parents have gone for work, but it is a holiday for us. We are making birthday greeting cards.



Now, fill in information to complete the sentences about yourself.

My name is

I am years old. I have

sibling/s. In my family, there are people. I love my

family because

Warm-up

Write a few lines in your notebook about what you like about your family the most.

.....

.....

.....

.....

.....

Activity Corner

Life Skills

Cognitive: Critical thinking

Whom do you resemble? Complete the given table.

Feature	Resemblance with people:		
	Mother	Father	Any other family member
Type of hair (curly, straight, etc.)			
Colour of hair			
Colour of eyes			

Warm-up

Alisha is pinning up some pictures on a display board. Identify the animals and their young ones.



Elephant and

Monkey and

Cat and

Bird and

PEOPLE IN UNIFORM

Identify their profession



A lawyer



A doctor



A chef



A nurse



A soldier

"Try not to be A Man of Success but become a Man of Values."

Albert Einstein

Values are like seeds that sprout, become saplings grow into trees and spread their branches all around. Building up of values system starts with the individual, moves on to the family and community, reorienting systems, structures and institutions.



Hi! My name is _____

Meet my special friends Values

Oops! Their names are jumbled up. Can you identify and spell them correctly?

Hint – The letter in **Bold** and *Italicised* begins the word.

esily**r**posnibi

nses**k**dni

ed**l**igncei

sotyie**g**em

eat**m**kwro

e**p**eca

ceano**f**er

hty**o**nse

ar**t**yihc

uroac**g**e

h**t**rut

r**b**revay

The Five Senses

THE SENSE

PART OF THE BODY

SIGHT

EYES



SMELL

NOSE



HEARING

EARS



TASTE

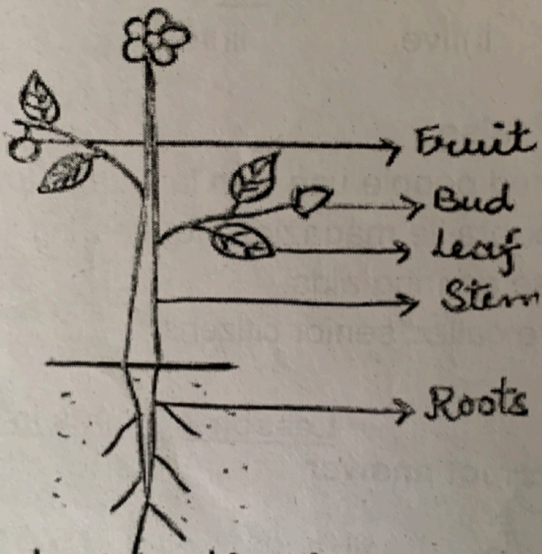
TONGUE



TOUCH

SKIN
(HAND)





Parts of a plant

कक्षा - तीसरी

विषय - हिंदी



ग्रीष्मावकाश हेतु गृह -कार्य



नोट : ग्रीष्मावकाश - गृह कार्य को अलग नोटबुक 

में सुंदर लेख में करें। 

1 कक्षा में अभी तक किया गया कार्य (व्याकरण)
पाठ 1 से 3 तक दोराहाए एवं शब्द भंडार लिखें।

(गुलमोहर पाठ्य पुस्तक) के पाठ 1 से 3 तक के
शब्दार्थ व प्रश्न उत्तर लिखें। 

2 गुलमोहर पाठ्यपुस्तक के पाठ 1 से 3 तक में आए
30 कठिन शब्द लिखें। 

4 अंगूठे की छाप से किसी जानवर का चित्र बनाइए।

5 गर्मियों में खाए जाने वाले फलों एवं पेय पदार्थों के नाम
लिखकर उनके चित्र बनाएं। 

6 10 पेज सुलेख के लिखे। 

7 हिंदी में 1 से 50 तक गिनती कॉपी में लिखे। 



Holidays Homework

Class = 3rd

Subject = Art and Craft

- 1. Make a Father's Day card.**
- 2. Make a paper bag and decorate it with waste material.**
- 3. Draw five seasonal fruits and colour them neatly.**
- 4. Cut different shapes of paper and paste them on chart paper. (5 Shapes)**

Holiday homework assignment

- Subject:- GK

1. Who is the Prime Minister of India?
2. Who is the president of India?
3. Who is the home minister of India?
4. Who is the Chief Minister of Haryana?
5. Name the capital of Tamilnadu.
6. Name the capital of Maharashtra.
7. Who is the Chief Minister of Delhi?
8. Banyan tree is the national tree of which country?
9. Which is the oldest language of India?
10. Holiday who is honoured as 'daughter of the nation'?
11. Which city of India is known as 'Pink City'?
12. Who was called the 'Missile man of India'?
13. Who was India's first woman Prime Minister?
14. Who was India's first woman president?
15. Who is the first Indian to travel into space?


16. What is the national emblem of India?
17. Which city is known as the Gateway of India?
18. Who invented zero?
19. Who is known as the 'father of the nation'?
20. Which tree is known as the kalpvriksh in the Indian coastal region?
21. Which is the biggest mammal?
22. Which country won the cricket World Cup 2019?
23. Who is the first person to step on the moon?
24. Which is the largest country in the world?
25. Which is the biggest mammal?
26. Which is the holy river of India?
27. When is Independence Day celebrated?
28. How many states are there in India?
29. On which planet do we live?
30. In which country did chess originate?
31. Who is known as the Iron Man of India?
32. How many spokes are there in the wheel of an Indian flag?

33. How many teeth are there in adult humans?
34. Which is the national game of India?
35. How many continents do we have?
36. Who is the founder of Microsoft?
37. Which is the tallest mountain in the world?
38. Which continent is known as Dark Continent?
39. Which day is observed as World Environment Day?
40. Which place is known as the roof of the world?
41. How many moon does the Earth have?
42. How many moons does Saturn have?
43. Who has composed the National Anthem of India?
44. Where is the Parliament of India located?
45. Which state is known as the fruit bowl of India?
46. The national currency of India is.
47. Who is the first citizen of India?

48. How many colours are in a rainbow?

49. How many years are there in a century?

50. Where is Mount Everest located?



MODEL SCHOOL KALANAUR

MATHEMATICS



Holidays Homework

Class- 3rd

Subject-Mathematics

Session -2022-23

Instructions- Make a separate practice notebook for holidays homework .

- learn and write tables 2 to 20 in Maths practice notebook.
- Revise Ch-3 (Addition), Ch-4 (subtraction) done till now in book and notebook.
- Do practice of 4- digit sums of addition and 4 digit sums of subtraction daily.

Project work-

- Make a folder with handmade sheet and decorate folder using mathematical shapes, designs and signs.

DO THE FOLLOWING WORKSHEETS

Q1 Write in Column and Add:

a) 980, 238 (ii) 36,456 and 239 (iii) 740, 652 and 98

Q2 Add

$$\begin{array}{r} (i) \ 3214 \\ + 7653 \\ \hline \end{array}$$

$$\begin{array}{r} (ii) \ 8130 \\ + 1868 \\ \hline \end{array}$$

$$\begin{array}{r} (iii) \ 4167 \\ + 1829 \\ \hline \end{array}$$

$$\begin{array}{r} (iv) \ 8670 \\ + 3105 \\ \hline \end{array}$$

Q3. Add the given numbers in two different ways.
What do you observe after finding the sum.

$$\begin{array}{r} a) \ 2345 \\ + 5432 \\ \hline \end{array}$$

$$\begin{array}{r} 5432 \\ + 2345 \\ \hline \end{array}$$

$$\begin{array}{r} b) \ 1829 \\ + 6134 \\ \hline \end{array}$$

$$\begin{array}{r} 6134 \\ + 1829 \\ \hline \end{array}$$

Q4 Fill in the blanks.

i) $5240 + 0 = \underline{\quad} + 5240$

(ii) $645 + 945 = \underline{\quad} + 645$

(iii) $\underline{\quad} + 246 = 346 + \underline{\quad}$

(iv) $2856 + 644 + \underline{\quad} = 702 + \underline{\quad} + 2856$

(v) $332 + 1422 + 196 = 196 + 332 + \underline{\quad}$

(vi) $6980 + \underline{\quad} = 6980$

Q5 Find the sum of the greatest 3-digit number and the smallest 3-digit number.

Q6 Expand 9872 according to place-value.

Q7 A bulb factory produced 2438, 3258, and 2990 bulbs in three days respectively. Find the total number of bulbs produced in the three days.

Q8 Write in column and subtract.

(i) 499 from 592 (ii) 0 from 530

(iii) 3252 from 9667 (iv) 3603 from 4000

DO THE FOLLOWING WORKSHEETS

Q9 Subtract.

$$\begin{array}{r} \text{(i)} \quad 9245 \\ - 3466 \\ \hline \end{array}$$

$$\text{(ii)} \quad \begin{array}{r} 8464 \\ - 4846 \\ \hline \end{array}$$

$$\text{(iii)} \quad \begin{array}{r} 3592 \\ - 1563 \\ \hline \end{array}$$

Q10 What should be added to 2389 to get 4800?

Q11 Find the difference between 4-digit the largest number and 4-digit the smallest number.

Q12 The sum of two numbers is 7889. If one of them is 2880; find the other number.

Q13 There are 4550 students in a school. If the number of boys is 2429. find the number of girls.

Q14 Find the difference and check your answer.

$$\begin{array}{ll} \text{(i)} \quad 7280 \text{ and } 4299 & \text{(ii)} \quad 4059 \text{ and } 7000 \\ \text{(iii)} \quad 5559 \text{ and } 9000 & \text{(iv)} \quad 3780 \text{ and } 5432 \end{array}$$

Q15 Write/learn tables 2 to 20 (two times) in your Maths Practice notebook.

Q16 Make the largest and smallest of 4 digits numbers. Each digit should be used

(Smallest) once only.

(Largest)

2, 3, 5, 1

4, 0, 2, 3

7, 1, 3, 0

DO THE FOLLOWING WORKSHEETS

$884 - 597 = \underline{\hspace{2cm}}$

$655 - 377 = \underline{\hspace{2cm}}$

$816 - 799 = \underline{\hspace{2cm}}$

$273 + 288 = \underline{\hspace{2cm}}$

$256 + 346 = \underline{\hspace{2cm}}$

$178 + 667 = \underline{\hspace{2cm}}$

$228 + 645 = \underline{\hspace{2cm}}$

$168 - 139 = \underline{\hspace{2cm}}$

$774 + 167 = \underline{\hspace{2cm}}$

$834 - 777 = \underline{\hspace{2cm}}$

$213 - 118 = \underline{\hspace{2cm}}$

$787 + 179 = \underline{\hspace{2cm}}$

$534 - 428 = \underline{\hspace{2cm}}$

$237 + 537 = \underline{\hspace{2cm}}$

$213 + 248 = \underline{\hspace{2cm}}$

$815 - 128 = \underline{\hspace{2cm}}$

$496 - 257 = \underline{\hspace{2cm}}$

$414 - 265 = \underline{\hspace{2cm}}$

$523 + 319 = \underline{\hspace{2cm}}$

$176 + 189 = \underline{\hspace{2cm}}$

$134 - 126 = \underline{\hspace{2cm}}$

$656 + 116 = \underline{\hspace{2cm}}$

$781 - 645 = \underline{\hspace{2cm}}$

$864 + 129 = \underline{\hspace{2cm}}$

$518 - 219 = \underline{\hspace{2cm}}$

$461 - 283 = \underline{\hspace{2cm}}$

$762 + 229 = \underline{\hspace{2cm}}$

$568 - 259 = \underline{\hspace{2cm}}$

$973 - 279 = \underline{\hspace{2cm}}$

$132 + 839 = \underline{\hspace{2cm}}$

$171 - 116 = \underline{\hspace{2cm}}$

$845 + 128 = \underline{\hspace{2cm}}$

$495 - 158 = \underline{\hspace{2cm}}$

$149 + 363 = \underline{\hspace{2cm}}$

$389 + 262 = \underline{\hspace{2cm}}$

$722 - 615 = \underline{\hspace{2cm}}$